

Mathematics Assessment Task 1
Isivivinyo Sezibalo 1

Grade 1
Ibanga loku-1

Surname: Isibongo:	Boy Umfana	Girl Intombazana
Name: Igama:		
Date of birth: Usuku lokuzalwa:		
School: Isikole:		
Province: Isifundazwe:		
EMIS no: Inombolo ye-emis:		

Total marks: 25
Isamba samamaki: 25

Question 1

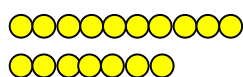
Umbuzo 1

(4)

Count and fill in the correct number of tens and ones.

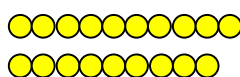
Bala bese ugcwalisa izinombolo ezifanele ezingamashumi nemivo.

a.



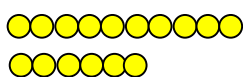
tens and ones
Amashumi a- nemivo e-

b.



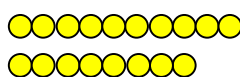
tens and ones
Amashumi a- nemivo e-

c.



tens and ones
Amashumi a- nemivo e-

d.



tens and ones
Amashumi a- nemivo e-

Question 2**Umbuzo 2**

(4)

Solve the word problems. Draw a picture to help you.

Xazulula le nkinga yamagama. Dweba isithombe uma kudingeka.

<p>a. I see five birds. Each bird has 2 wings. How many wings are there in total? Ngibona izinyoni ezinhlanu. Inyoni ngayinye inamaphiko ama-2. Mangaki amaphiko esewonke?</p> <p>__ wings amaphiko a__</p>	<p>b. Gogo sells bananas in bags of five bananas each. She has 18 bananas. How many bags of five bananas each can she make up? Ugogo uthengisa ubhanana omhlanu esakeni ngalinye. Unobhanana oyi-18. Mangaki amasaka anobhanana omhlanu esakeni ngalinye azoba nawo?</p> <p>__ boxes amabhokisi a__</p>
<p>c. I have R20. If I buy sweets for R6, how much change will I get? Nginama-R20. Uma ngithenga amaswidi ngama-R6, ngizobuyelwa wushintshi ongakanani?</p> <p>_____ change Ushintshi wami ngama-R_____</p>	<p>d. Suckers cost 5c each. If I buy three suckers, how much money will I spend? Uswidi ubiza ama-5c umunye. Uma ngithenga omthathu, ngizosebenzisa malini seyiyonke?</p> <p>_____ cents Amasenti a-_____</p>

Question 3**Umbuzo 3**

(10)

Write in the answer. (Use any resource to help you.)

Ibhala impendulo. (Sebenzisa noma yiziphi izinto ezikhona.)

a. $11 + 6 =$

b. $19 - 7 =$

c. $12 + 4 =$

d. $18 - 8 =$

e. $5 + 14 =$

f. $16 - 12 =$

g. $2 + 4 + 12 =$

h. $20 - 1 - 4 =$

i. $15 + 0 + 2 =$

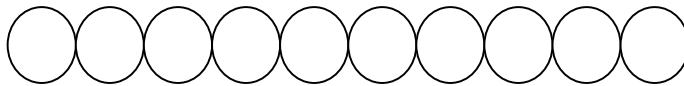
j. $17 - 6 - 4 =$

Question 4**Umbuzo 4**

(1)

Colour in the ninth circle.



Faka umbala isiyingi sesishiyagalolunye.

**Question 5****Umbuzo 5**

(2)

Circle the correct answers.

Kokelezela izimpendulo ezifanele.

Likuphi ibhola? 	behind Lingemuva	What view is this? Kuvelelwe ngakuphi lokhu? 	top view Ngaphezulu
	next to Liseduze		front view Ngaphambili
	in front of lingaphambili	side view ngasohlangothini	

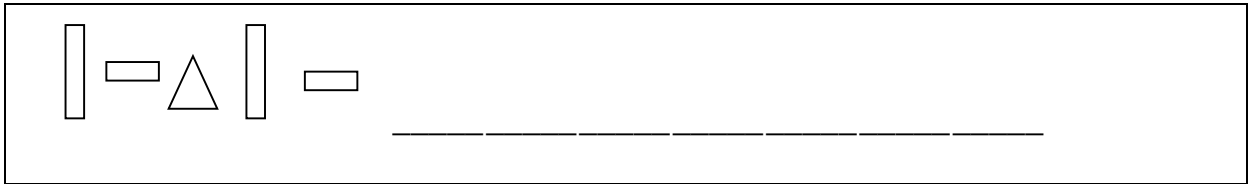
Question 6

Umbuzo 6

(2)

Draw two shapes that follow on this pattern.

Dweba izimo ezimbili ezilandelayo kuleli phethini.



Question 7

Umbuzo 7

(2)

Cross out all the objects that can slide and circle the objects that can roll.

Dweba umugqa phezulu kwezinto ezishibilikayo ukokelezele ezigingqikayo.

