

Mathematics Assessment Task 1  
Mmetse Tekanyetso ya Tsebetso ya 1

Grade 1  
Kereiti ya 1

Surname: Fane:	Boy Moshanyana	Girl Ngwanana
Name: Lebitso:		
Date of birth: Letsatsi la tswalo:		
School: Sekolo:		
Province: Porofensi:		
EMIS no: Nomoro ya EMIS:		

Total marks: 25

Matshwao kaofela: 25

Question 1

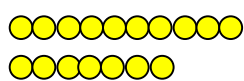
Potso ya 1

(4)

Count and fill in the correct number of tens and ones.

Bala o tlatse palo e nepahetseng ya mashome le bonngwe.

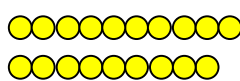
a.



tens and  ones

Mashome a  le bonngwe ba

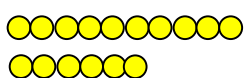
b.



tens and  ones


mashome a  le bonngwe ba

c.



tens and  ones

d.



tens and  ones

mashome a  le bonngwe ba

mashome a  le bonngwe ba

## Question 2

### Potso ya 2

(4)

Solve the word problems. Draw a picture to help you.

Rarolla diqaka tsa mantswa. Taka setshwantsho ho ithusa.

<p>a. I see five birds. Each bird has 2 wings. How many wings are there in total? Ke bona dinonyana tse hlano. Nonyana ka nngwe e na le mapheo a 2. Ke mapheo a makae kaofela?</p> <p>__ wings mapheo a__</p>	<p>b. Gogo sells bananas in bags of five bananas each. She has 18 bananas. How many bags of five bananas each can she make up? Gogo o rekisa dipanana tse hlano mokotlaneng ka mong. A ka etsa mekotlana e mekae ya dipanana tse hlano?</p> <p>__ boxes Mekotlana e _</p>
<p>c. I have R20. If I buy sweets for R6, how much change will I get? Ke na le R20. Ebang ke reka dipompong ka R6, ke tla fumana tjhentjhe ya bokae?</p> <p>_____ change tjhentjhe ke_____</p>	<p>d. Suckers cost 5c each. If I buy three suckers, how much money will I spend? Dimomonane di bitsa 5c e le nngwe. Ebang ke reka dimomonane tse tharo, ke tla hloka ho sebedisa tjhelete e kae?</p> <p>_____ cents disente tse_____</p>

**Question 3****Potso ya 3**

(10)

Write in the answer. (Use any resource to help you.)

Ngola karabo. (Sebedisa sefe kapa sefe se ka o thusang)

a.  $11 + 6 = \square$

b.  $19 - 7 = \square$

c.  $12 + 4 = \square$

d.  $18 - 8 = \square$

e.  $5 + 14 = \square$

f.  $16 - 12 = \square$

g.  $2 + 4 + 12 = \square$

h.  $20 - 1 - 4 = \square$

i.  $15 + 0 + 2 = \square$

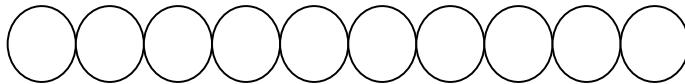
j.  $17 - 6 - 4 = \square$

**Question 4****Potso ya 4**

(1)

Colour in the ninth circle.


Khalara sedikadiwe sa borobong.


**Question 5****Potso ya 5**

(2)

Circle the correct answers.

Etsa sedikadikwe karabong e nepahetseng.

Where is the ball? Bolo e hokae? 	behind kamora	What view is this? Ke ponahalo efe ena?	top view ponahalo e ka hodimo
	next to pela		front view ponahalo e ka pele
	in front of kapele ho		side view ponahalo e

			lehlakoreng
--	--	--	-------------

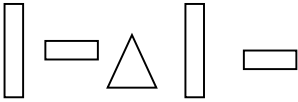
**Question 6**

**Potso ya 6**

(2)

Draw the next two shapes in this pattern.

Taka dibopeho tse latelang pateroneng.

	_____
---	-------

**Question 7**

**Potso ya 7**

(2)

Cross out all the objects that can slide and circle the objects that can roll.

Etsa sekere dinthong tse ka thellang le sedikadikwe dinthong tse ka bidikang.

