

Mathematics Assessment Task 2
IMathemathiksi ukuHlola umSebenzi 2

Grade 2
Igreyidi 2

Surname: Isibongo:	Boy Umsana	Girl Umntazana
Name: Ibizo:		
Date of birth: Ilanga lamabeletho:		
School: Isikolo:		
Province: Iphrovinsi:		
EMIS no: Inomboro ye-EMS:		

Total marks: 20

Inani loke lamamaksi: 20

Question 1

(1)

Umbuzo 1

Draw coins to show R12,85.

Dweba iinhlavu zemali ukutjengisa i-R12,85


Question 2

(3)

Umbuzo 2

Look at the pictures of the money inside the two boxes. Write a number sentence and an answer to show how much money there is altogether.

Qala iinthombezi zemali ngaphakathi kwamabhoksi amabili. Tlola umutjho wenomboro kanye nependulo ukutjengisa bona kunamalini seyiyoke.

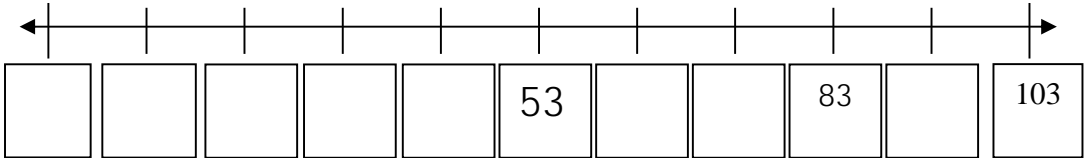


_____ + _____ = _____

Question 3 (1)

Umsebenzi 3

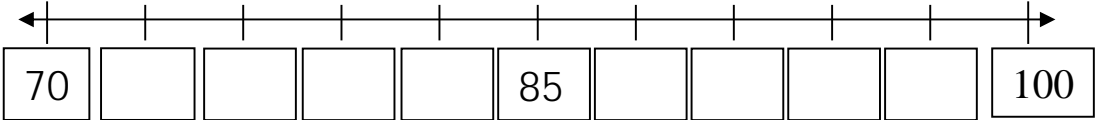
Complete the 10s number line.
Qedelela inambalayini yama-10



Question 4 (1)

Umbuzo 4

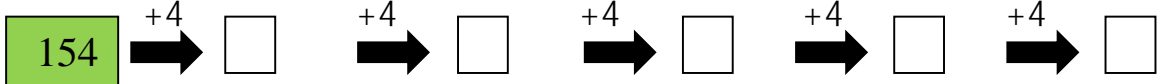
Complete the 3s number line.
Qedelela inambalayini yoku-3



Question 5 (1)

Umbuzo 5

Complete the following:
Qedelela lokhu okulandelako:



Question 6

(1)

Umbuzo 6

Circle the container that can hold the most water.

Yenza isiyingilizi esimumathini esingaba namanzi amanengi khulu.



Question 7

(2)

Umbuzo 7

Write the following as a repeated addition number sentence.

Tlola lokhu okulandelako njengomutjho wenomboro yokuhlanganisa okubuyelelweko

- a. 6 groups of 4 _____
linqhema ezisi-6 zaku-4
- b. 3 groups of 5 _____
linqhema ezi-3 zaku-5

Question 8

(2)

Umbuzo 8

Write the following as a multiplication number sentence.

Tlola lokhu okulandelako njengomutjho wenomboro obuyelelwako.

- a. 2 groups of ten _____
linqhema ezi-2 zalitjhumi
- b. 5 groups of three _____
linqhema ezi-5 zakuthathu

Question 9

(2)

Umbuzo 9

Write a multiplication number sentence to answer the word problem.
Tlola umutjho wenomboro wokubuyelela ukobana uphendule umraro wegama.

Mom baked cupcakes. She made 4 with red icing, 4 with yellow icing, 4 with pink icing, 4 with green icing, 4 with purple icing and 4 with orange icing. How many cupcakes did she make altogether?
Umma ubhage abonomgojana. Wenze ama-4 nge-ayisinghi ebovu, ma-4 nge-ayisinghi esarulani, ma-4 nge-ayisinghi epinki, ma-4 nge-ayisinghi ehlaza satjani, ma-nge-ayisinghi ephephuli bese ma-4 nge-ayisinghi e-orentji. Bangaki abonomgojana ababhagako sebaboke?

She made _____ cupcakes altogether.
Wenze abonomgojana aba_____ sebaboke

Question 10

(3)

Umbuzo 10

Draw pictures to show your answer.
Dweba iinthombe ukobana utjengise ipendulwakho.

Share 29 counters equally between 3 friends.
Yabelanani ngeembali ezima-29 ngokulingana hlangana nabangani aba-3.

Each friend gets counters. There are left over.

Umngani ngamunye uthola iimbali ezi kuneensalela ezi

Question 11

(3)

Umbuzo 11

What fraction is coloured?

Ngiliphi icezu elikhalaraweke?



a. _____



b. _____



c. _____

(These words might help: half, quarter, fifth, third)

(amagama la kungenzeka akusize: ihafu, ikota. Kwesihlanu, kwesithathu)