

Mathematics Assessment Task 1
IMathemathiksi ukuHlola umSebenzi 1

Grade 2
Igreyidi 2

Surname: Isibongo:	Boy Umsana	Girl Umntazana
Name: Ibizo:		
Date of birth: Ilanga lamabeletho:		
School: Isikolo:		
Province: Iphrovinsi:		
EMIS no: Inomboro ye-EMSI		

Total marks: 20

Inani loke Lamamaksi: 20

Question 1

(2)

Umbuzo 1

Draw a picture for the number 78, showing tens and units.

Dweba isithombe senomboro 78, sitjengise amatjhumi kanye namayunithi.

Question 2

(1)

Umbuzo 2

Write the number name for 69.

Tlola ibizo lenomboro lama-69.

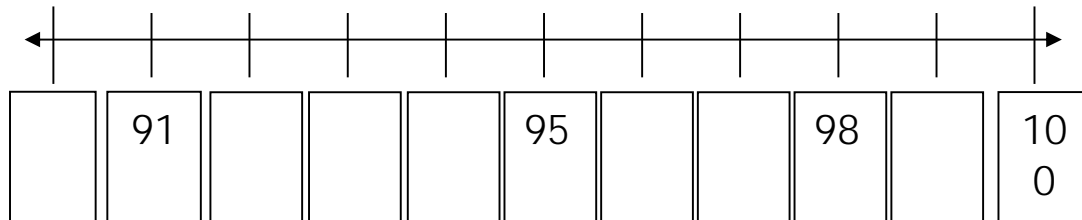
Question 3

(1)

Umbuzo 3

Complete the labeling of the number line.

Qedelela ukuleyibulwa kwenambalayini

**Question 4**

(2)

Umbuzo 4

Subtract by breaking up both numbers:

Khupha ngokukghedlha iinomboro zombili:

$$87 - 56 = \square$$

Question 5

(1)

Umbuzo 5

Write these numbers from the smallest to the biggest.

Tlola iinomborwezi ukusukela kwencani ukuya kwekulu

88	86	83	85	84	87
----	----	----	----	----	----

Use these blocks to provide your answer.

Sebenzisa amabhlogo la ukunikela ipendulwakho.

--	--	--	--	--	--

Question 6

(2)

Umbuzo 6

Circle any two numbers that are smaller than 95, but bigger than 91.
Yenza isiyingilizi kwezinye nezinye iinomboro ezimbili ezincani ku-95, kodwana zibe zikulu kuna-91.

89	90	91	92	93	94	95	96
----	----	----	----	----	----	----	----

Question 7

(4)

Umsebenzi 7

Complete the following:

Qedelela lokhu okulandelako:

a. 9 tens + 6 units 9 amatjhumu + 6 amayunithi	=
b. 7 units + 8 tens 7 amayunithi + 8 amatjhumu	=
c. 85 =	__tens + __units _ amatjhumu + _ amayunithi
d. 70 =	__tens + __units _ amatjhumu + _ amayunithi

Question 8

(2)

Umbuzo 8

Add these two numbers by breaking down both the numbers.

Hlanganisa iinomboro ezimbilezi ngokuzikghedlha zombili

$$43 + 36 = \square$$

Question 9

(1)

Umbuzo 9

Between which two tens is the number 86?

Ama-86 ahlngana namatjhumu amabili maphi?

Between _____ and _____

Hlangana _____ na _____

Question 10

Umbuzo 10

(2)

Draw a shape in the first block that only has round sides. In the second block draw a shape with only straight sides.

Dweba ijamo ebhlogweni lokuthoma elinamajamo arono kwaphela. Ebhlogweni lesibili dweba ijamo elinehlangothi elinqophileko kwaphela.



a. Round sides
amahlangothi arono

b. Straight sides
amahlangothi anqophileko



Question 11

(1)

Umbuzo 11

How many triangles are there in this picture? Count them and write the answer in the block.

Bangaki aboncantathu abasesithombenapha? Babale bese utlola ipendulo ebhlogweni.



Question 12

(1)

Umbuzo 12

Draw a horizontal line to show symmetry in this picture.

Dweba umuda othabaleleko ukobana utjengise ibandekobulingana esithombenesi.

