

Mathematics Assessment Task 1
Isivivinyo Sezibalo Umsebenzi 1

Grade 2
Ibanga 2

Surname: Isibongo:	Boy Umfana	Girl Intombazana
Name: Igama:		
Date of birth: Usuku lokuzalwa:		
School: Isikole:		
Province: Isifundazwe:		
EMIS no: Inombolo ye-EMIS:		

Total marks: 20

Isamba Samamaki: 20

Question 1

Umbuzo 1

(2)

Draw a picture for the number 78, showing tens and units.

Dweba isithombe senombolo 78, ukhombise amashumi nemivo.

Question 2

Umbuzo 2

(1)

Write the number name for 69.

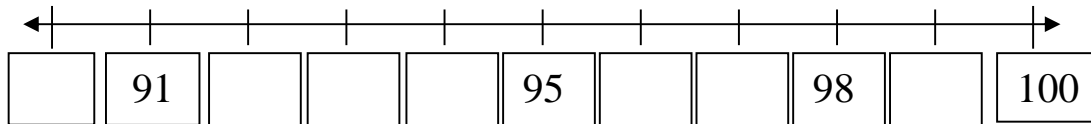
Bhala igama lenombolo 69.

Question 3**Umbuzo 3**

(1)

Complete the labeling of the number line.

Qedelela ukulebula umugqa wezinombolo.

**Question 4****Umbuzo 4**

(2)

Subtract by breaking up both numbers:

Susa ngokuhlakaza lezi nombolo zombili: $87 - 56 = \square$ **Question 5****Umbuzo 5**

(1)

Write these numbers from the smallest to the biggest.

Bhala lezi nombolo usuke kwencane kunazo zonke uye kwenkulu kunazo zonke.

88	86	83	85	84	87
----	----	----	----	----	----

Use these blocks to provide your answer.

Sebenzisa amabhulokhi ukukhombisa impendulo yakho.

--	--	--	--	--	--

Question 6**Umbuzo 6**

(2)

Circle any two numbers that are smaller than 95, but bigger than 91.

Kokelezela izinombolo ezingaphansi kwama-95, kodwa ezingaphezulu kwama-91.

89	90	91	92	93	94	95	96
----	----	----	----	----	----	----	----

Question 7**Umbuzo 7**

(4)

Complete the following:

Qedelela lokhu okulandelayo:

a. 9 tens + 6 units amashumi ayi-9 + imivo e-6	=
b. 7 units + 8 tens imivo eyi-7 + amashumi ayi-8	=
c. 85 =	__tens + __units amashumi a-__ + imivo e-__
d. 70 =	__tens + __units amashumi a-__ + imivo e-__

Question 8**Umbuzo 8**

(2)

Add these two numbers by breaking down both the numbers.

Hlanganisa lezi zinombolo zombili ngokuzihlakaza.

$$43 + 36 = \square$$

Question 9**Umbuzo 9**

(1)

Between which two tens is the number 86?

Iphakathi kwamamaphi amashumi amabili inombolo 86?

Between _____ and _____

Phakathi kwenombolo _____ nenombolo _____

Question 10

Umbuzo 10

(2)

Draw a shape in the first block that only has round sides. In the second block draw a shape with only straight sides.

Dweba isimo ebhulokhini lokuqala elinezinhlangothi ezigobile.

Ebhulokhini lesibili dweba isimo asinemigqa eqondile kuphela.



a. Round sides
Izinhlangothi ezigobile

b. Straight sides
Izinhlangothi eziqondile



Question 11

Umbuzo 11

(1)

How many triangles are there in this picture? Count them and write the answer in the block.

Bangaki onxantathu kulesi sithombe? Babale bese ubhala impendulo ebhulokhini.



Question 12

Umbuzo 12

(1)

Draw a horizontal line to show symmetry in this picture.

Dweba umugqa ovundlayo ukhombise ukufana kwezinhlangothi ezimbili kulesi sithombe.

