

**Mathematics Assessment Task 2**  
**Isivivinyo Sezibalo Umsebenzi wesi-2**

**Grade 2**  
**Ibanga lesi-2**

Surname: Isibongo:	Boy Umfana	Girl Intombazana
Name: Igama:		
Date of birth: Usuku lokuzalwa:		
School: Isikole:		
Province: Isifundazwe:		
EMIS no: Inombolo ye-EMIS		

Total marks : 20

Isamba Samamaki : 20

**Question 1**

**Umbuzo 1**

(1)

Draw coins to show R12,85.

Dweba imali eyizinhlamvu ukhombise i-R12,85.

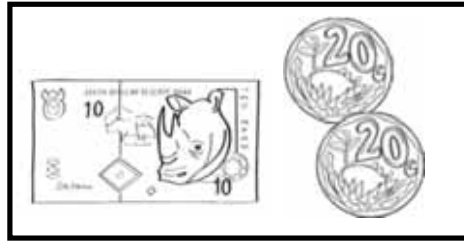
**Question 2**

**Umbuzo 2**

(3)

Look at the pictures of the money inside the two boxes. Write a number sentence and an answer to show how much money there is altogether.

Buka izithombe zemali eziphakathi emabhokisini. Bhala umusho wezinombolo kanye nempendulo ukhombise ukuthi malini seyihlangene.



\_\_\_\_\_ + \_\_\_\_\_ = \_\_\_\_\_

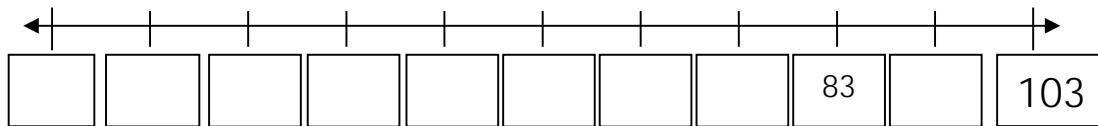
**Question 3**

**Umbuzo 3**

(1)

Complete the 10s number line.

Qedelela umugqa wezinombolo ezihamba ngama-10.



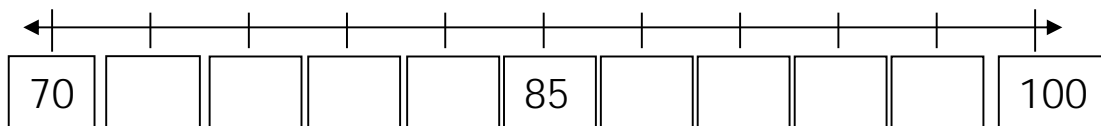
**Question 4**

**Umbuzo 4**

(1)

Complete the 3s number line.

Qedelela umugqa wezinombolo ezihamba nga-3.



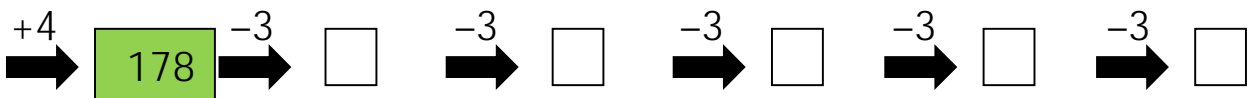
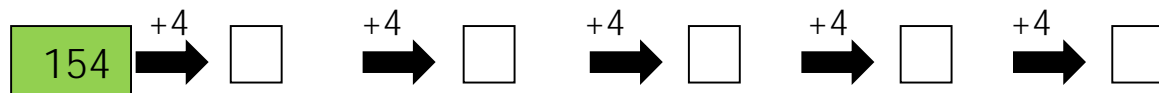
**Question 5**

**Umbuzo 5**

(1)

Complete the following:

Qedelela okulandelayo:



**Question 6**

**Umbuzo 6**

(1)

Circle the container that can hold the most water.

Kokelezela isiqukathi esikwazi ukumumatha amanzi amaningi.



**Question 7**

**Umbuzo 7**

(2)

Write the following as a repeated addition number sentence.

Bhala okulandelayo kube yisibalo esiphindaphinda ukuhlanganisa sibe wumusho wezinombolo.

a. 6 groups of 4 \_\_\_\_\_

Amaqoqo ayi-6 ezinto ezihamba nga-4

b. 3 groups of 5 \_\_\_\_\_

Amaqoqo a-3 ezinto ezihamba nga-5

**Question 8**

**Umbuzo 8**

(2)

Write the following as a multiplication number sentence.

Bhala okulandelayo kube yisibalo sokuphindaphinda esiwumusho wezinombolo.

a. 2 groups of ten \_\_\_\_\_

Amaqoqo ama-2 ezinto ezihamba nga-10

b. 5 groups of three \_\_\_\_\_

Amaqoqo ama-5 ezinto ezihamba nga-3

**Question 9****Umbuzo 9**

(2)

Write a multiplication number sentence to answer the word problem.

Bhala umusho wezinombolo ngokuphindaphinda ukulungisa le nkinga yamagama.

Mom baked cupcakes. She made 4 with red icing, 4 with yellow icing, 4 with pink icing, 4 with green icing, 4 with purple icing and 4 with orange icing. How many cupcakes did she make altogether?

uMama ubhake amakhekhe asankomishi. Wenze ama-4 nge-ayisingi ebomvu, ama-4 nge-ayisingi ephuzi, ama-4 nge-ayisingi ephinki, ama-4 nge-ayisingi esatshani, ama-4 nge-ayisingi ebukhwebezana, nama-4 nge-ayisingi esawolintshi. Ubhake amakhekhe amangaki esewonke?

---

She made \_\_\_\_\_ cupcakes altogether.

Wenze amakhekhe a- \_\_\_\_\_ esephelele.

**Question 10****Umbuzo 10**

(3)

Draw pictures to show your answer.

Dweba isithombe ukhombise impendulo yakho.

Share 29 counters equally between 3 friends.

Hlukanisela abangani aba-3 ngokulinganayo izibali ezingama-29.

Each friend gets  counters.

There are  left over.

Umngani ngamunye uthola izibali ezi-

kusala ezi-

**Question 11**

**Umbuzo 11**

(3)

What fraction is coloured?

Qhezu lini elifakwe umbala?



a. \_\_\_\_\_



b. \_\_\_\_\_



c. \_\_\_\_\_

(These words might help: half, quarter, fifth, third)

(La magama angasiza: uhhafu, ikota, okukodwa kokuhlano, okukodwa kokuthathu)